
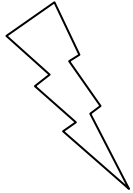



Eleven Plus Maths Worksheet - Product

<u>QUESTION</u>	
	<p>What is the product of 74 and 10?</p> <p>(a) 84    (b) 7.4    (c) 740    (d) 84</p>
<u>HINT</u>	
	<p>What is the product of 74 and 10?</p> <p>The "product of" is the answer to a multiplication sum.</p> <p>When you multiply 74 by 10 the figures move one place to the left <math>74 \times 10 = 740</math></p>
<u>ANSWER</u>	
	c