
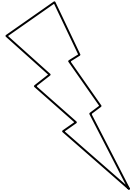



Eleven Plus Maths Worksheet - Triangles

|  |  |
|--|--|
| <u>QUESTION</u>  |  |
|   | <p>A triangle with two sides equal in length is</p> <p>a. Scalene    b. Isosceles    c. Kite    d. Equilateral</p> |
| <u>HINT</u>  |  |
|   | <p>A triangle with two sides of equal length is:</p> <p>Answer = Isosceles</p>                                     |
| <u>ANSWER</u>  |  |
|  | <p>b</p>   |