
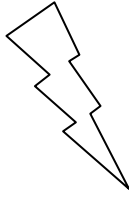



Eleven Plus Maths Worksheet - Sum of Numbers

QUESTION	
	<p>The sum of two numbers is 240. The one number is 140 the other number is</p> <p>a. 40 b. 380 c. 180 d. 100</p>
HINT	
	<p>The sum of two numbers is 240. The one number is 140. The other number is:</p> <p>Find the difference between the two numbers to find the missing number.</p> <p>$240 - 140 = ?$</p>
ANSWER	
	<p>d</p>