
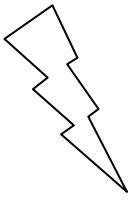
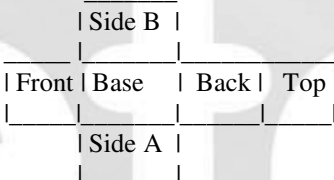





Eleven Plus Maths Worksheet - Shapes

<u>QUESTION</u>	
	<p>How many sides has a cube?</p> <p>a. 12 b. 8 c. 3 d. 6</p>
<u>HINT</u>	
	<p>How many sides has a cube?</p> <div style="text-align: center;">  </div> <p>This is not a good cube. If you opened it out it would look like this.</p> <p>The cube has 6 sides or 6 faces.</p>
<u>ANSWER</u>	
	<p>d</p>