
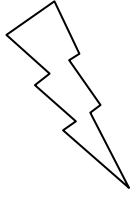



Eleven Plus Maths Worksheet - Rounding to the nearest 10

QUESTION	
	<p>Round 34 to the nearest ten</p> <p>a. 40 b. 33 c. 30 d. 300</p>
HINT	
	<p>Round 34 to the nearest ten.</p> <p>To round 34 you need to look at the unit which is 4. 4 is less than 5 so we ignore the 4 units and the figure becomes 30.</p> <p>If the unit figure had been 5 or 6 or 7, 8, 9 then the tens would have been increased by 1 ten.</p> <p>Example: 27 becomes 30 32 becomes 30</p>
ANSWER	
	<p>c</p>