
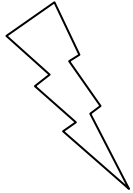



## Eleven Plus Maths Worksheet - Recognising Numbers

<u>QUESTION</u>							
	<p>Forty three thousand five hundred and twenty four in figures is</p> <p>a.     3 524    b.     43 542    c.     43 500     d.     43 524</p>						
<u>HINT</u>							
	<p>Forty three thousand five hundred and twenty four in figures is:</p> <p>Here you need to think of the place value headings for Thousands and hundreds.</p> <table style="margin-left: auto; margin-right: auto;"> <tr> <td style="text-align: center;">Thous.</td> <td style="text-align: center;">Hundreds</td> </tr> <tr> <td style="text-align: center;">HTU</td> <td style="text-align: center;">HTU</td> </tr> <tr> <td style="text-align: center;">4 3</td> <td style="text-align: center;">5 2 4</td> </tr> </table>	Thous.	Hundreds	HTU	HTU	4 3	5 2 4
Thous.	Hundreds						
HTU	HTU						
4 3	5 2 4						
<u>ANSWER</u>							
	d						