
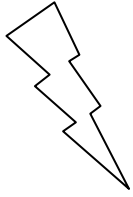



Eleven Plus Maths Worksheet - Recognising Numbers

<u>QUESTION</u>										
	<p>One million in figures is</p> <p>a. 1000 b. 10 000 c. 1 000 000 d. 11 000</p>									
<u>HINT</u>										
	<p>1 million in figures is :</p> <p>Think of place value, and remember that spaces are left between the millions and thousands, and between the thousands and hundreds.</p> <table style="margin-left: auto; margin-right: auto;"> <tr> <td>Mill</td> <td>Thous.</td> <td>Hund.</td> </tr> <tr> <td>HTU</td> <td>HTU</td> <td>HTU</td> </tr> <tr> <td>1</td> <td>000</td> <td>000</td> </tr> </table>	Mill	Thous.	Hund.	HTU	HTU	HTU	1	000	000
Mill	Thous.	Hund.								
HTU	HTU	HTU								
1	000	000								
<u>ANSWER</u>										
	<p>c</p>									