
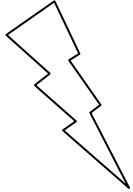



Eleven Plus Maths Worksheet - Prime Numbers

QUESTION	
	<p>A prime number between 25 and 30 is</p> <p>a. 26 b. 27 c. 28 d. 29</p>
HINT	
	<p>A prime number between 25 and 30 is:</p> <p>A prime number is a number which two factors 1 and the number itself, like 3, 7, 11 etc.</p> <p>25, 26 27, 28 (29) 30</p> <p>All the other numbers have factors</p> <p>25 = 5 × 5</p> <p>26 = 2 × 13</p> <p>27 = 3 × 3 × 3</p> <p>28 = 2 × 2 × 7</p> <p>30 = 2 × 3 × 5</p> <p>Only 29 has only two factors 1 and 29.</p>
ANSWER	
	<p>d</p>