
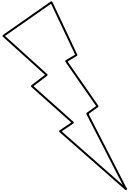



Eleven Plus Maths Worksheet - Missing Symbols

<u>QUESTION</u>	
	$90 \ ? \ 10 = 9 + 0$ a.    +    b.    -    c.    x    d.    /
<u>HINT</u>	
	$90 \ ? \ 10 = 9 + 0$ In this sum two steps can be taken at once. $90 \div 10 \ ? \ 9 \div 10 = 9$ $9 \ ? \ 1 \quad = 9$ Answer ? = ÷
<u>ANSWER</u>	
	d