
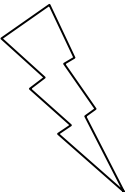



Eleven Plus Maths Worksheet - Missing Symbols

<u>QUESTION</u>	
	<p>$36 ? 6 = 2 + 4$</p> <p>a. + b. - c. x d. /</p>
<u>HINT</u>	
	<p>$36 ? 6 = 2 + 4$</p> <p>The ? could be = - x or ÷</p> <p>To find what it is the second part of the number sentence must first be worked.</p> <p>$36 ? 6 = 2 + 4$ becomes $36 ? 6 = 6$</p> <p>Your tables tell you that $6 \times 6 = 36$, and therefore $36 \div 6 = 6$</p> <p>Answer ÷</p>
<u>ANSWER</u>	
	<p>d</p>