
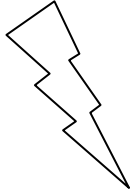



Eleven Plus Maths Worksheet - Measurements

<u>QUESTION</u>										
	<p>3.675km =</p> <p>a. 675m b. 6375m c. 3675m d. 367m</p>									
<u>HINT</u>										
	<p>3.675 km =</p> <p>675m 6375m 3675m 367m</p> <p>There are 1000m in a kilometre. It is easy then to read off the answer if you remember place value.</p> <table style="margin-left: auto; margin-right: auto;"> <tr> <td></td> <td>Thous.</td> <td>Hundreds</td> </tr> <tr> <td></td> <td>HTU</td> <td>HTU</td> </tr> <tr> <td>3.675km =</td> <td>3</td> <td>675 m</td> </tr> </table>		Thous.	Hundreds		HTU	HTU	3.675km =	3	675 m
	Thous.	Hundreds								
	HTU	HTU								
3.675km =	3	675 m								
<u>ANSWER</u>										
	<p>c</p>									