

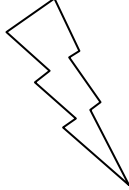
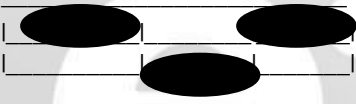





Eleven Plus Maths Worksheet - Fraction Work

QUESTION	
	<p>What fraction of this shape is shaded?</p>  <p>a. <math>\frac{3}{8}</math>    b. <math>\frac{3}{4}</math>    c. <math>\frac{1}{8}</math>    d. <math>\frac{1}{2}</math></p>
HINT	
	 <p>What fraction of the shape is shaded?</p> <p>First you must count up to see into how many parts the whole has divided. This will give you the denominator. The number of shaded parts gives the numerator.</p> $\frac{3}{8}$
ANSWER	
	<p>a</p>