
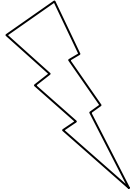





Eleven Plus Maths Worksheet - Addition

<u>QUESTION</u>	
	$398 + 202$ a. 600 b. 500 c. 400 d. 501
<u>HINT</u>	
	$398 + 202$ Practise adding horizontally. Add $8 + 2 = 10$. Put the 0 in the units column and carry the 1 ten. $1 + 9 + 0 = 10$. Put the 0 in the tens column and carry the 1 hundred. $1 + 3 + 2 = 6$ Answer 600.
<u>ANSWER</u>	
	a