

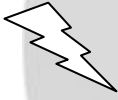





Eleven Plus Verbal Reasoning Worksheet - USING GRIDS TO FIND INFORMATION

<u>QUESTION</u>	
	A supermarket carried out a cake tasting survey. Shoppers were asked to vote for their favourite cake. Cake A had less votes than cake B. Cake D had more votes than cakes C and E but less than cake A. Which cake was the most popular?
<u>HOW TO DO IT</u>	
	Answer the question using the given information.
<u>HINT</u>	
	<p>Read the question carefully and gradually eliminate possibilities. Sometimes it may be useful to think of it as an equation or to draw a little diagram.</p> <p>e.g. Ben has 6 sweets. If Bill gives Ben 2 sweets, Ben will have half as many as Bill started off with. How many sweets did Bill start off with?</p> <p>Answer: $(6+2) \times 2 = 16$</p>
<u>ANSWER</u>	
	B