







Eleven Plus Verbal Reasoning Worksheet - SEQUENCES

<u>QUESTION</u>	
	Work out the rule and find the next two numbers in the series. 0.2 0.4 0.7 1.1 1.6 (?) (?)
<u>HOW TO DO IT</u>	
	Work out the rule and find the next 2 numbers in the sequence.
<u>HINT</u>	
	Are the numbers getting bigger or smaller? And by how much? Are they square numbers? e.g. 1, 4, 9, 16, 25, ? , ? They are square numbers so next 2 are 36 and 49
<u>ANSWER</u>	
	2.2, 2.9