
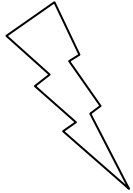



Eleven Plus Maths Worksheet - Product

QUESTION	
	<p>What is the product of 74 and 10?</p> <p>(a) 84 (b) 7.4 (c) 740 (d) 84</p>
HINT	
	<p>What is the product of 74 and 10?</p> <p>The "product of" is the answer to a multiplication sum.</p> <p>When you multiply 74 by 10 the figures move one place to the left $74 \times 10 = 740$</p>
ANSWER	
	c