
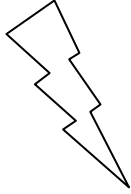



Eleven Plus Maths Worksheet - Number Recognition

QUESTION										
	<p>Four million, six hundred thousand and five looks like:</p> <p>(a) 460500 (b) 4600005 (c) 4000605 (d) 460005</p>									
HINT										
	<p>Four million, six hundred thousand and five looks like.</p> <p>Put your headings.</p> <table border="0" style="margin-left: auto; margin-right: auto;"> <tr> <td>Mill</td> <td>Thous.</td> <td>Hund.</td> </tr> <tr> <td>HTU</td> <td>HTU</td> <td>HTU</td> </tr> <tr> <td>4</td> <td>6 0 0</td> <td>0 0 5</td> </tr> </table> <p>Then fill in the figures in their named places. There are no figures for the tens and units in the hundreds so you put noughts. There are no hundreds or tens so you put noughts.</p>	Mill	Thous.	Hund.	HTU	HTU	HTU	4	6 0 0	0 0 5
Mill	Thous.	Hund.								
HTU	HTU	HTU								
4	6 0 0	0 0 5								
ANSWER										
	<p>b</p>									