
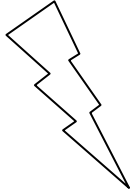



Eleven Plus Maths Worksheet - Multiplying decimals by ten

| QUESTION  |  |
|---|--|
|    | <p><math>4.39 \times 10</math></p> <p>(a) 43.9 (b) 0.439 (c) 439 (d) none of these</p>   |
| HINT  |  |
|    | <p><math>4.39 \times 10</math></p> <p>When you multiply a number by ten it gets ten times bigger. This means that the figures move <u>one place</u> to the <u>left</u>.</p> $  \begin{array}{r}  \text{HTU. } \text{t h th} \\  4.39 \\  \times 10. \\  \hline  43.9  \end{array}  $ <p>You must make sure that the decimal point does <u>not</u> move. The figures move because the answer is now ten times bigger.</p> |
| ANSWER  |  |
|  | <p>a</p>   |