
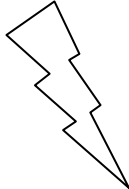



Eleven Plus Maths Worksheet - Money problems

<u>QUESTION</u>	
	<p>A boy spends £1.47 on some sweets and pays for them with a ten pound note. How much change does he receive?</p> <p>(a) £8.53 (b) £9.63 (c) £9.53 (d) none of these answers</p>
<u>HINT</u>	
	<p>A boy spends £1.47 on some sweets, and pays for them with a ten pound note. How much change does he receive?</p> <p>(i) The words "ten pounds" must be written in figures.</p> <p>(ii) The money spent is <u>taken away from</u> the money the boy started with.</p> <p>(iii) When you write the sum down keep the decimal points under one another to make sure the figures land in the correct places.</p> $\begin{array}{r} \text{£}10.00 \\ - \quad 1.47 \\ \hline \end{array}$
<u>ANSWER</u>	
	<p>a</p>