
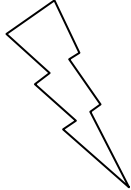



Eleven Plus Maths Worksheet - Fractions to Percentages

QUESTION	
	<p>Express $\frac{24}{25}$ as a percentage.</p> <p>(a) 24% (b) 48% (c) 72% (d) 96%</p>
HINT	
	<p>Express $\frac{24}{25}$ as a percentage.</p> <p>Remember that in percentages a <u>whole</u> is <u>100%</u>.</p> <p>When you look at a fraction $\frac{24}{25}$ you remember that it is $\frac{24}{25}$ of a whole.</p> <p>This is how we write the sum:-</p> $\frac{24}{25} \text{ of } 100 \quad \text{or} \quad \frac{24}{25} \times \frac{100}{1}$ $= \frac{24}{25} \times \frac{100}{1}$ $= 96\%$
ANSWER	
	<p>d</p>