
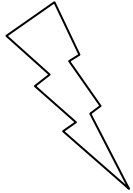



Eleven Plus Maths Worksheet - Triangles

<u>QUESTION</u>	
 <p>A triangle with two sides equal in length is</p> <p>a. Scalene    b. Isosceles    c. Kite    d. Equilateral</p>	
<u>HINT</u>	
 <p>A triangle with two sides of equal length is:</p> <p>Answer = Isosceles</p>	
<u>ANSWER</u>	
 <p>b</p>	