
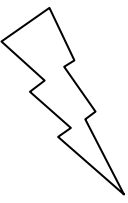



Eleven Plus Maths Worksheet - Subtraction Fractions of Measurements

<u>QUESTION</u>	
	$\frac{1}{2}\text{km} - \frac{1}{4}\text{km} =$ a. 25m b. 2.5km c. 0.25km d. 3.5km
<u>HINT</u>	
	$\frac{1}{2}\text{ km} - \frac{1}{4}\text{ km}$ 2 4 25m 2.5km 0.25km 3.5km There are two ways of doing this sum. (a) $\frac{1}{2} - \frac{1}{4} = \frac{1}{4}\text{ km}$ $\frac{1}{4}\text{ km} = 0.25\text{ km}$ (b) $\frac{1}{2}\text{ km} = 0.5\text{ km}$ $\frac{1}{4}\text{ km} = 0.25\text{ km}$ $0.5 - 0.25\text{ km} = 0.25\text{ km}.$
<u>ANSWER</u>	
	c