
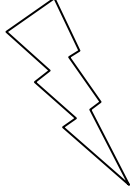





Eleven Plus Maths Worksheet - Square Numbers

<u>QUESTION</u>	
	<p>Which one is a square number?</p> <p>a. 12 b. 16 c. 2 d. 0</p>
<u>HINT</u>	
	<p>Which one is a square number?</p> <p>12 16 2 0</p> <p>When a number is multiplied by itself the answer is called the square of the number.</p> <p>$4 \times 4 = 16$ 16 is the square number.</p>
<u>ANSWER</u>	
	<p>b</p>