
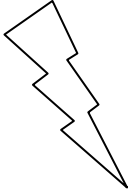



Eleven Plus Maths Worksheet - Rounding to the nearest whole number

<u>QUESTION</u>	
	<p>Round 99.5 to the nearest whole number</p> <p>a. 99    b. 910    c. 100    d. 200</p>
<u>HINT</u>	
	<p>Round 99.5 to the nearest whole number.</p> <p>Here the rule for the decimal fraction is the same as for the units in the previous example.</p> <p>0.5 is rounded up to a whole number and 99.5 becomes 100.</p>
<u>ANSWER</u>	
	<p>c</p>