
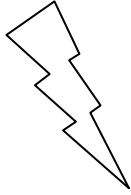



Eleven Plus Maths Worksheet - Number Problems

|  |  |
|--|--|
| <u>QUESTION</u>  |  |
|   | <p>The numbers of the houses along one side of the street are odd numbers. The number of the first house is 3. The number of the thirteenth house is</p> <p>a. 39    b. 27    c. 100    d. 25</p>  |
| <u>HINT</u>  |  |
|   | <p>The numbers of the houses along one side of the street are odd numbers. The number of the first house is 3. The number of the thirteenth house is:</p> <p>3 5 7 9 11 13 15 17 21 23 25 (27)</p> |
| <u>ANSWER</u>  |  |
|  | <p>b</p>   |