
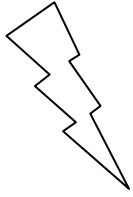



Eleven Plus Maths Worksheet - Measurements

<u>QUESTION</u>	
	<p>2.500m =</p> <p>a. 2.5km b. 0.25km c. 25km d. 0.0025km</p>
<u>HINT</u>	
	<p>2.500m = (No decimal point)</p> <p>2.5km 0.25km 25km 0.0025km</p> <p>There are 1000m in a kilometre.</p> <p>2.500m = 2.500km which is written 2.5km</p>
<u>ANSWER</u>	
	<p>a</p>