
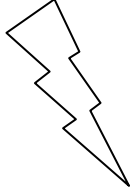



Eleven Plus Maths Worksheet - Fractions of Measurements

<u>QUESTION</u>	
	<p>5/8 of 64m =</p> <p>a. 40ml b. 40 c. 40m d. 18m</p>
<u>HINT</u>	
	<p>$\frac{5}{8}$ of 64m</p> <p>40ml 40 40m 18m</p> $\frac{5}{8} \times \frac{64}{1}$ <p>= 40m</p>
<u>ANSWER</u>	
	<p>c</p>