

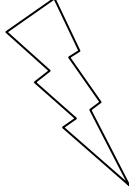
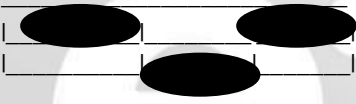





Eleven Plus Maths Worksheet - Fraction Work

QUESTION	
	<p>What fraction of this shape is shaded?</p>  <p>a. $\frac{3}{8}$ b. $\frac{3}{4}$ c. $\frac{1}{8}$ d. $\frac{1}{2}$</p>
HINT	
	<p>What fraction of the shape is shaded?</p>  <p>First you must count up to see into how many parts the whole has divided. This will give you the denominator. The number of shaded parts gives the numerator.</p> $\frac{3}{8}$
ANSWER	
	<p>a</p>