







Eleven Plus Verbal Reasoning Worksheet - SEQUENCES

| | |
|-------------------------------------------------------------------------------------|------------------------------------------------------------------------------------------------------------------------------------------------------------------------------------------|
| <u>QUESTION</u> | |
|  | Work out the rule and find the next two numbers in the series. 0.2 0.4 0.7 1.1 1.6 (?) (?) |
| <u>HOW TO DO IT</u> | |
|  | Work out the rule and find the next 2 numbers in the sequence. |
| <u>HINT</u> | |
|  | Are the numbers getting bigger or smaller? And by how much? Are they square numbers? e.g. 1, 4, 9, 16, 25, ? , ? They are square numbers so next 2 are 36 and 49 |
| <u>ANSWER</u> | |
|  | 2.2, 2.9 |